

C

ಒಟ್ಟು ಮುದ್ರಿತ ಪುಟಗಳ ಸಂಖ್ಯೆ : 12]

Total No. of Printed Pages : 12]

ಒಟ್ಟು ಪ್ರಶ್ನೆಗಳ ಸಂಖ್ಯೆ : 48]

Total No. of Questions : 48]

ಸಂಕೇತ ಸಂಖ್ಯೆ : **85-E**

Code No. : **85-E**

**CCE PF
CCE PR
NSR & NSPR**

Question Paper Serial No. **302**

ವಿಷಯ : ಸಮಾಜ ವಿಜ್ಞಾನ

Subject : SOCIAL SCIENCE

(ಇಂಗ್ಲಿಷ್ ಮಾಧ್ಯಮ / English Medium)

(ಖಾಸಗಿ ಅಭ್ಯರ್ಥಿ & ಪುನರಾವರ್ತಿತ ಖಾಸಗಿ ಅಭ್ಯರ್ಥಿ / ಎನ್.ಎಸ್.ಆರ್. & ಎನ್.ಎಸ್.ಪಿ.ಆರ್.)

(Private Fresh & Private Repeater / NSR & NSPR)

ದಿನಾಂಕ : 06. 04. 2022]

[Date : 06. 04. 2022

ಸಮಯ : ಬೆಳಿಗ್ಗೆ 10-30 ರಿಂದ ಮಧ್ಯಾಹ್ನ-1-45 ರವರೆಗೆ] [Time : 10-30 A.M. to 1-45 P.M.

ಗರಿಷ್ಠ ಅಂಕಗಳು : 100]

[Max. Marks : 100

General Instructions to the Candidate :

1. This question paper consists of objective and subjective types of 48 questions.
2. This question paper has been sealed by reverse jacket. You have to cut on the right side to open the paper at the time of commencement of the examination. Check whether all the pages of the question paper are intact.
3. Follow the instructions given against both the objective and subjective types of questions.
4. Figures in the right hand margin indicate maximum marks for the questions.
5. The maximum time to answer the paper is given at the top of the question paper. It includes 15 minutes for reading the question paper.

302



PF/PR/NSR & NSPR-(C)-(700)-21023



[Turn over


ಇಲ್ಲಿಂದ ಕತ್ತರಿಸಿ

TEAR HERE TO OPEN THE QUESTION PAPER


ಪ್ರಶ್ನೆಪತ್ರಿಕೆಯನ್ನು ತೆರೆಯಲು ಇಲ್ಲಿ ಕತ್ತರಿಸಿ

Tear here



I. **Four choices are given for each of the following questions / incomplete statements. Choose the correct answer and write the complete answer along with its letter of alphabet.**  **8 × 1 = 8**


1. The sea route between India and Europe was discovered by

(A) Columbus 


(B) Vasco-da-Gama


(C) Almeida 


(D) Albuquerque. 

2. The movement led by Ali brothers was 

(A) Non-Co-operation

(B) Khilafat 

(C) Civil Disobedience 

(D) Quit India. 





3. The policy of keeping safe distance from both the Power Blocs of the world is known as



(A) Non-Alignment



(B) Anti-Apartheid



(C) Anti-Imperialism

(D) Disarmament.



4. Best example for labour without pay among the following is



(A) Nurse



(B) Teacher



(C) Housewife

(D) Police.





5. A periodical started by Dr. B. R. Ambedkar was



(A) Kesari



(B) Mooka Nayaka

(C) Maratha



(D) Bombay Samachar.



6. The Nagarjuna Sagar wildlife sanctuary is located in the state

(A) Karnataka



(B) Kerala

(C) Uttar Pradesh



(D) Telangana.



7. The Constitutional Amendment that brought into existence the three levels of Panchayat institutions is



(A) 24th

(B) 42nd

(C) 73rd



(D) 92nd.





8. The type of bank account where any number of transactions can be

made in a day is



(A) Savings Bank Account



(B) Current Account



(C) Recurring Deposit Account

(D) Term Deposit Account.



II. Answer the following questions in a sentence each :



8 × 1 = 8

9. Why did Wellesley resign to his post and return to England ?

10. Who was the first President of India ?



11. When do we celebrate the Human Rights Day every year ?



12. What is mob ?





13. Where does the Eastern Ghats and the Western Ghats meet ?



14. Which type of forests are found in the river deltas ?

15. What is National Income ?



16. Who is the founder of 'Wipro Technologies' ?



III. Answer the following questions in two to four sentences / points

each :



18 × 2 = 36

17. What were the results of the battle of Buxar ?



18. What were the conditions of Subsidiary Alliance ?

19. Which are the Panchsheel Principles ?



OR

Explain the struggle of India for the implementation of Human Rights.





20. List out the challenges faced by unorganised sector workers.



OR

Name any four Environmental Movements.



21. Which are the important climatic seasons of India ?



22. What are the causes for soil erosion ?

23. Mention the housing programmes.



24. What are the objectives of Consumer Protection Act ?



25. What were the causes for the Battle of Plassey ?

26. What were the reformations of Annie Besant ?



27. Mention the military reasons for the mutiny of 1857.



28. What are the measures essential for the eradication of unemployment ?





29. What are the major problems that emerged after World War II ?

30. What are the features of Social Stratification ?



31. Which are the main physiographic divisions of India ?



32. What is the importance of Agriculture in India ?

33. Explain the process of development.



34. What are the causes for consumer exploitation ?



IV. Answer the following questions in six sentences / points each :



9 × 3 = 27

35. What were the impacts of British Education in India ?



36. What are the aims of Arya Samaj ?



OR

What were the problems faced by India at the time of Independence ?





37. What are the reasons for the failure of the First War of Indian Independence ?



38. Explain the relationship of India and Russia.



39. Write the legal measures to eradicate untouchability in India.

40. What are the factors that influence the localization of industries ?



OR

List out the effects of cyclones.

41. What is the importance of transport ? Explain.



42. Point out the various dimensions of gender discrimination prevailing in present day India.



OR

Explain the features of Panchayat Raj system adopted in India.





43. What are the functions of banks ?



OR

What are the entrepreneur's role in the economic development ?



V. Answer the following questions in about *eight* sentences / points

each :



4 × 4 = 16

44. How did Dhondia Wagh fight against the British ?



OR

Explain the role of Radicals in the Indian Independence Movement.

45. What is the role of Subhash Chandra Bose in the freedom struggle ?

46. Which measures are taken to improve the status of women in

India ?



47. List out the types of agriculture followed in India.





VI. 48. Draw an outline map of India and mark the following : 1 + 4 = 5

a) $23\frac{1}{2}^{\circ}$ North Latitude



b) Bhakra-Nangal



c) River Kaveri

d) Mumbai.



Alternative Question for Visually impaired Candidates only :



(In lieu of Q. No. 48)



5

Mention the main aims of the Multipurpose River Valley Projects.

